




TIED NOTES

A curved line connecting notes that are the same pitch is called a **tie**.
Let the note ring for the sum of the notes that are tied together. You get to do math again!

How many beats will you hold each of these tied notes for?

$$3+3= \underline{\quad} \quad 2+2= \underline{\quad} \quad 3+1= \underline{\quad}$$

Create your own addition questions by using tied notes.

$$\underline{\quad} + \underline{\quad} = \underline{\quad}$$

$$\underline{\quad} + \underline{\quad} = \underline{\quad}$$

$$\underline{\quad} + \underline{\quad} = \underline{\quad}$$

$$\underline{\quad} + \underline{\quad} = \underline{\quad}$$