




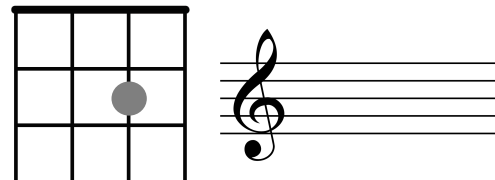
FRET EQUATIONS

Fill in the missing answers, frets and treble staff notes.


1) The C string + fret _____ = _____



2) The _____ string + fret 2 = _____



3) The A string + fret _____ = _____



NEXT LEVEL QUESTIONS:

Which fret on the C string will you use to make E?

Which fret on the G string will you use to make B?

